



परमाणु ऊर्जा शिक्षण संस्था

Atomic Energy Education Society

टर्म-1/आवधिक परीक्षा-2 2023-24 Term-I/PT-II Examination 2023 - 24

कक्षा /Class : V

अवधि / Duration : 3 Hrs.

विषय / Subject : EVS

अधिकतम अंक/ Maximum Marks : 80

To be filled by the student

Unique Examination No: _____

Class /Sec.: _____ Date of Examination: _____ Day of Examination: _____

Name of the School: _____

Invigilator's Sign: _____

To be filled by the teacher

Marks Obtained

Total Marks

Examiner's Sign: _____ Cross checker Sign: _____

Exam I/C sign: _____

General Instructions:

This Paper consists of the following Sections:

Section- I (30 Marks)

Section- II (25 Marks)

Section- III C (25 Marks)

All questions are compulsory.

OBSERVATION AND REPORTING (30 Marks)

Q. 1 Choose the correct answer and fill in the blanks. (5x1m =5marks)


1. _____ (Ghana / Gir) is in Bharatpur district of Rajasthan.
2. A tiger can see _____ (four / six) times better at night than us.
3. The temperature of our stomach is around _____ degree Celsius (40/ 30).
4. The Dandi March was carried out in the year _____. (1930 /1945)
5. Bachendri Pal stepped on to the peak of the Mount Everest on _____.
(March 23, 1983 / May 23, 1984)

Q.2 Observe the picture and answer the following. (2X5=10 marks)

- a. What is this? What is it used for?



b. Who is this man in the picture? What did he discover?



c. Which fort is this? In which city is it located?









d. What is given to the patient in the picture? Why it is given to the patient?

e. Which instrument is there in the picture? How does it help us?



Q. 3 Match the following.

(4x1m=4marks)

Column A	Column B
i) 	a) A model of the earth.
ii) 	b) It is used to attack the enemies.
iii) 	c) Attracts and traps the insects.
iv) 	d) Spaceship taking off

Q.4 Draw a picture of a tongue and label it well.

(4)

Q. 5 Circle the odd one out.

(2x1m=2marks)

i) Sugar Milk Oil Salt

ii) Cobra Python Viper krait

Q-6. Look at the picture carefully and answer the following questions. (1x5=5)


क्लीनिकल विकृति रिपोर्ट
CLINICAL PATHOLOGY REPORT
केंद्रीय सरकार स्वास्थ्य योजना
Central Govt. Health Scheme

18/08/2007

नाम/Name..... **Rajat** आयु/Age..... **11** स्त्री या पुरुष/Sex..... **Male**

रोग की पहचान/Diagnosis..... **Fever with Chills and Rigors**
(**ठंड लगकर कंपकंपी के साथ बुखार**)

Malarial Parasite Found in Blood Sample
(**खून में मलेरिया के जीवाणु पाए गए**)


Pathologist

a. How old is the patient?

b. When did the patient get the report?

c. What symptoms did the patient have?

d. Name the disease the patient suffered from?

e. A doctor with specialised training to study medical conditions using human tissue, blood, pee and other body fluids is called _____

IDENTIFICATION AND CLASSIFICATION (25 marks)

Q.7 Do as directed.

(4x1= 4m)

I) Answer in one word.

- a. Name the liquid in the mouth helps in digestion- _____
- b. First man to walk on the moon- _____
- c. People who kill animals - _____
- d. The height of the Mount Everest - _____

II) Give any two examples for each of the following.

(1x6=6)

a. Instruments used in a been party

b. Things which do not dissolve in water

c. Things made from ripe mangoes-

d. Tools needed for climbing a mountain –

e. Diseases that are spread by mosquitoes-

f. Things that are sour in taste –

III) Give reasons.

(2x3= 6m)

a. Gandhiji undertook the Dandi March.

b. We need extra energy on the mountains.

c. Birds move their neck very often.

IV) Classify the plants according to the place of their origin.

(8 X ½ m=4marks)

Spinach	bhindi (okra)	cabbage	tomato	pea
coffeebean	potato	methi (fenugreek)		

India	Europe	Africa	South America

V) Write some important facts about a sloth.

(5 marks)

DISCOVERY OF FACTS (25 Marks)

Q. 8 Answer the following question in one sentences. (3x1m = 3marks)

a. Who is Sunita Williams?

b. How do you know that food is spoiled?

c. What is Ghadsisar?

Q. 9 Tick the correct answer

(1X5 =5 marks)

1) Which of the following is not a poisonous snake?

- a) cobra b) python c) viper d) common krait

2) Which of the following festivals is related to the moon?

- a) Eid b) Good Friday c) Christmas d) Bihu

3) What appears on moist bread when it is kept for a few days?

- a) virus b) bacteria c) fungus d) algae

4) What are rhinoceros killed for?

- a) tusk b) skin c) horn d) musk

5) Which one of the following diseases can be known without blood test?

- a) anaemia b) eye flu c) dengue d) malaria

Q.10 Answer the following questions in two or three sentences. (5x2= 10m)

1. What is 'Tarun Bharat Sangh'?

2. How is salt obtained from the sea?

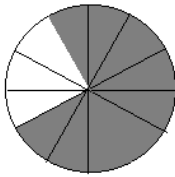
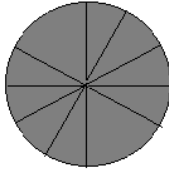
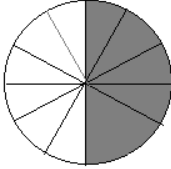
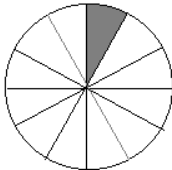
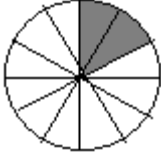
3. Who invented Velcro? What are its uses?

4. Write the duties of a group leader in 2-4 sentences.

5. What are bastions? What are they made for?

Q.11 Match the following animals with their sleeping hours.

(1x5= 5)

Animals	Sleeping hours in a 24-hour clock
i) Cat	a) 
ii) Python	b) 
iii) Lizard in winters	c) 
iv) Cow	d) 
v) Giraffe	e) 

Q.12 Mark the following states on the map of India. ($\frac{1}{2} \times 4 = 2$)

Rajasthan Gujarat Odisha Uttarakhand

