



परमाणु ऊर्जा शिक्षण संस्था

Atomic Energy Education Society

टर्म-1/आवधिक परीक्षा-2 2023-24 Term-I/PT-II Examination 2023 - 24

कक्षा /Class :IV

अवधि / Duration : 3hrs.

विषय / Subject : EVS

अधिकतम अंक/ Maximum Marks : 80

To be filled by the student

Unique Examination No: _____

Class /Sec.:_____ Date of Examination: _____ Day of Examination: _____

Name of the School: _____

Invigilator's Sign: _____

To be filled by the teacher

Marks Obtained

Total Marks

Examiner's Sign: _____ Cross checker Sign: _____

Exam I/C sign: _____

General Instructions:

This paper consists of :

Section A: Observation and Reporting — 30 marks

Section B: Identification and Classification — 25 marks

Section C: Discovery of Facts — 25 marks

All the questions are compulsory.

SECTION A (30 marks)

I. Fill in the blanks.

(1 x 5 = 5)

1. _____ will completely dissolve in water.

(Stone / Chalk / Sugar)

2. The paths in _____ are rocky and uneven.

(Uttarakhand / Mumbai / Kerala)

3. _____ flowers are cooked and eaten widely in Uttar Pradesh.

(Kachnar / Sahjan / Banana)

4. Karnam Malleshwari is an Indian _____.

(boxer / weight lifter / cricketer)

5. A _____ is a simple machine that makes our work easier.

(pulley / bridge / vallam)

II. Observe the pictures and answer the questions.

(2 x 5 = 10)

1.



a) Name this game.

b) How many players are there in each team in this game?

2.



a) Name the flower.

b) Write any two uses of this flower.

i) _____

ii) _____

3.



a) Identify the picture. What is it?

b) Where is it seen?

4.



a) Name the type of bridge.

b) How is it better than a bamboo bridge?

5.



a) What is this picture of?

b) How does it pollute the rivers?

III. Match the following .

(1 x 5 = 5)

1. Chetandas

a) Rajasthan

2. Omana

b) Andhra Pradesh

3. Anita

c) Bihar

4. Amrita


d) Haryana

5. Susheela

e) Kerala

IV. Look at the picture and answer the questions given below. (1 x 5 = 5)

(rainwater , cooking , high mountains , big cities , boiling)



1. The river water is the cleanest near the _____.

2. Mixing of _____ does not pollute the river.

3. The river water is the dirtiest near the _____.

4. _____ is one of the best methods of cleaning water.

5. Polluted river water is unfit for _____.

V. Write three sentences about Madhubani paintings. (1 x 3 = 3)

VI. Write any two activities that you see on a railway platform. (1 x 2 = 2)

SECTION B (25 marks)

I. Give two examples for each of the following. (1 x 5 = 5)

1. Flowers used for making perfume or itr.

2. Rivers of India.

3. Places in India where it snows.

4. Things used to make a pucca house.

5. Things that dissolve in water very easily.

II. Compare how Nimmi's and Tsering's life changed. (1 x 4 = 4)

	Nimmi's life	Tsering's life
What event happened?		
How it affected their life?		

III. Give reasons. (2 x 4 = 8)

1. Chetandas's family brought cowdung from nearby houses.

2. We make rules in games and in our lives.

3. Elephants love to play with mud and water.

4. We should switch off our car engines while waiting at a level crossing.

IV. Write two sentences each on :

(2 x 2 = 4)

A. Write down any two ways in which water bodies get polluted?

1. _____

2. _____

B. Write down two sentences on Khejadi tree ?

1. _____

2. _____


**V. Write down any two differences between animals whose ears we can see
and animals whose ears we cannot see.**

(1 x 4 = 4)

	Animals whose ears are seen	Animals whose ears are not seen
1		
2		

SECTION C (25 marks)

I. Read the given railway ticket and answer the questions. (1 x 5 = 5)

		पं.एन.आर.नं. PNR NO.	गाडी नं. TRAIN NO.	दि. वि. वि. मी. DATE K.M.	वयस्क बच्चे ADULT CHILD	68250918	
B20-6449755		9037	24-12-2006	643	2	1	/68250918
वर्ग/CLASS		JOURNEY CUM RESERVATION TICKET				म. सं. / नं. आ. सं. RESV UPTO	
2वाता बंदरा टर्मिनस		रतलाम जं.				PRS-WDLS	
2A		BANDRA TERMINUS		RATLAM JN			
कोच COACH	सीट/बर्थ SEAT/BERTH	लिंग SEX	उम्र AGE	यात्रा अधिकार पत्र T AUTHORITY	रिपायन CONC.	आ. शु. म. शु. गु. अ. R. FEE S. CH S.F. CH	व. नकल रु. T. CASH Rs.
A1	21 LB	M	39			75	2578
A1	23 SL	F	37			Rs. TWO FIVE SEVEN EIGHT ONLY	
A1	22 UB	M	7			I-TICKET/ NO CASH REFUNDS	
(NEW TIME TABLE FROM 01-12-2006) AVADH EXPRESS				BOARDING BOTS 24-12-2006			
713 27-10-2006 14:36 RCT1 210 VIA BRC							

- The age of the youngest passenger : _____
- The total fare (price of the ticket) : _____
- PNR No. of the ticket : _____
- The total distance travelled by the passengers : _____
- The name of the train : _____

II. Show the following places in the given map.

(1 x 5 = 5)

1. Andhra Pradesh
2. Rajasthan
3. Assam
4. Haryana
5. Maharashtra



III. Label the pictures of the people who help us in a train or at a railway station. (1 x 5 = 5)

1.



2.



3.




4.



5.



IV. Identify the following people who help us to build our house.(1 x 5 = 5)



1. He uses tools such as tester, wires, screw driver etc. and repairs electric devices. _____

2. He uses spade, pan etc. and helps in digging soil, passing bricks, holding ladder etc. _____

3. He uses saw, hammer, nails etc. to make wooden furniture .

4. He uses sand paper, paint brush, ladder, cloth etc. to apply new coat of paint to the house. _____

5. He uses cement, sand, bricks, iron rods etc. to build the floors and walls of the house. _____

V. Answer in one word.

(1 x 5 = 5)

1. A special vehicle used in Gujarat which is a combination of a motorcycle and a wooden cart behind it. Ans: _____
2. The flowers of this plant are used in Maharashtra to make vegetables and pakoras. Ans: _____
3. As per this government act, every child aged 6 to 14 years, has a right to free and compulsory education. Ans: _____
4. The people of Karnataka speak this language.
Ans: _____
5. The person responsible for training the players and teaching them all the rules of a game. Ans: _____