

Total No. of Pages : 8

ATOMIC ENERGY EDUCATION SOCIETY

TERM-II EXAMINATION, March -2018

Subject –EVS

Maximum Marks – 80

Class – III

Time Allowed – 3 Hours

To be filled by student

Name of the student _____

Name of the School - _____

Roll number _____ Class _____ Sec. _____

Signature of the Invigilator _____



Signature of the Examiner _____

Signature of the Checker _____ Marks Obtained

Knowledge (35 marks)

1 Fill in the blanks with the correct words given in the brackets.

(1x10 =10)

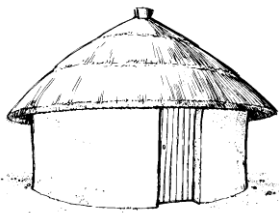
1. Braille script is based on _____ points. (four / six)
2. Letters are _____ before sending them to their proper address.(mixed / sorted)
3. Potters make pots with _____.(clay / stone)
4. Chess is an _____ game. (outdoor / indoor)
5. We get stamps in _____.(bank / post office)

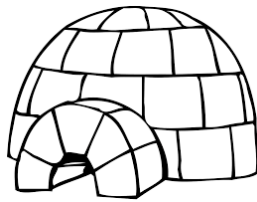
6. _____ is capital of India. (New Delhi / Mumbai)
7. All the things in nature are _____ .
(interdependent / not interdependent)
8. Rainfall is very _____ in Rajasthan .(scarce / heavy)
9. Clothes are made by _____ threads. (sticking / weaving)
10. People who cannot see carry a _____ stick when they go out.
(Black / white)

2. Name the following . (1x5=5)


1. A stem which is cooked as a vegetable. _____
2. Tool used for digging soil. _____
3. A special drink of Kashmir. _____
4. A game played with small coloured glass balls. _____
5. These are pitched in the ground for staying in a camp. _____

3. Identify the pictures and write their names (1x5=5)











4. Answer the questions in one or two sentences. (1x5=5)

1. What are the things that a potter requires to make pots?


2. What types of houses are seen in big cities?

3. Write one way of re-using water.

4. How are the roofs of houses in hilly area?

5. Write one way how you would take care of your pet.

5. Draw a Letter Box and colour it. (5)

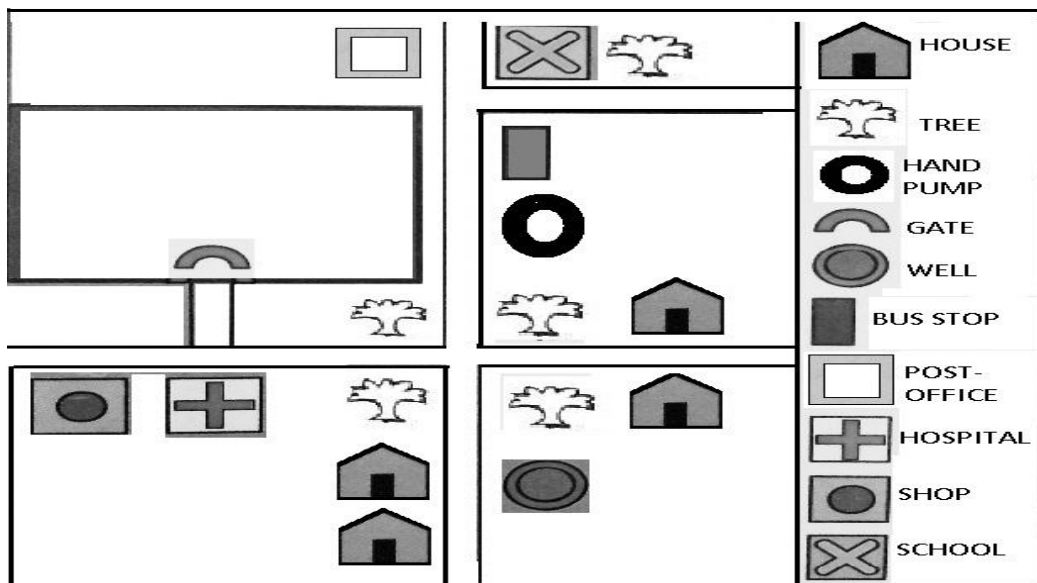


6. Write a short note on Delhi.

(2 1/2)

7. Look at the map given below and complete the following.

(2 1/2)



- a) There are _____ trees in the map.
- b) There are four _____ in the map.
- c) The shop is near the _____. (Hospital/ Post office)
- d) The bus stop is nearer to the _____. (Handpump/Gate)
- e) Without the list of symbols could you have read the map?
_____. (Yes/No)

Understanding-25 marks

8. Write whether the statements are True or False. (1 x5=5)

1. Unstitched clothes can be used to drape in different ways. _____
2. We should keep the water running while brushing our teeth. _____
3. People in Assam build wooden houses. _____
4. In a family, children and the old are not taken care of. _____
5. All the families are the same everywhere _____

9. Match the following. (1x4=4)

Medicine for cough and cold

Tennis

Worms eat these

Basil(Tulsi)

Repair cars and scooters

Fruits

Sania Mirza

Mechanic

10. Give two examples of each (1x6=6)

a) Utensils made of clay

b) Types of letter

c) Games you like to play

11. Complete the following (1x5=5)

a) Wood comes from _____

b) Trees need _____ , _____

c) Bricks are made from _____ , _____

12. Write your full address in the space given below. (2½)

ADDRESS:

PIN: _____

13. Complete the sentences. (2½)

1. Water collected in tanka is mostly used for drinking because

2. Symbols are used in maps because

3. Braille script was invented by

Application (20 marks)

14. Circle the odd one

(1x5 =5)

- | | | | | |
|----|------------------|--------------|-----------|---------------|
| 1. | snake and ladder | chess | cricket | playing cards |
| 2. | honey | egg | banana | milk |
| 3. | mango | curry leaves | jackfruit | Amla |
| 4. | stamps | postcard | phone | parcel |
| 5. | dupatta | shirt | turban | lungi |

15. Match the following

(1 x 5=5)

Srinagar

grass

Assam

rat

Goat

snow

Manali

shikara

Snake

heavy rainfall

16. Complete the table

(1 x 5=5)

Name of the animal

Why we keep it

Ox

Dog

It gives milk

Honeybee

We love it

17. Find the names of five food items that we get from plants in the grid and encircle them. (1x5=5)

S	P	I	N	A	C	H
W	D	Q	H	Z	U	Y
T	O	M	A	T	O	C
G	K	P	L	X	N	O
R	S	T	U	V	I	R
L	E	M	O	N	O	N
C	S	I	Q	M	N	V